

**HOME LINK**  
**6•2**

**More Line Segments, Rays, and Lines**



**Family Note**

Refer to the following notations to help your child draw and label line segments, rays, and lines.

line segment $AB$	$\overline{AB}$	
ray $BA$	$\overrightarrow{BA}$	
line $AB$	$\overleftrightarrow{AB}$	


Please return this Home Link to school tomorrow.



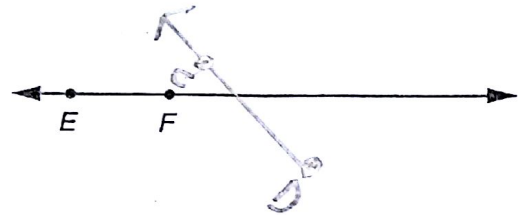
4 Feedback on back

Use a straightedge and a sharp pencil to draw the following. Be sure to mark points and label the line segments, rays, and lines.


1. Draw line segment  $\overline{YZ}$ , that is parallel to  $\overline{AB}$ .



2. Draw a ray,  $\overrightarrow{CD}$ , that intersects  $\overleftrightarrow{EF}$ .



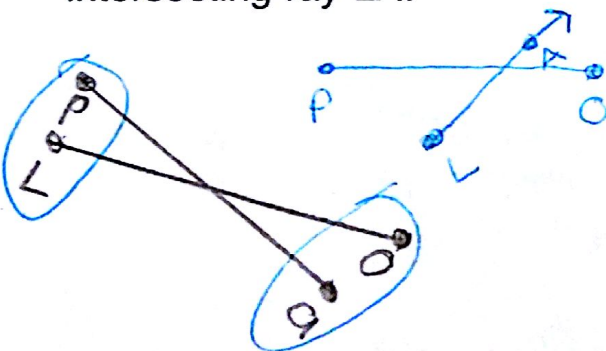
3. Draw two parallel rays,  $\overrightarrow{IS}$  and  $\overrightarrow{NO}$ .



4. Draw two intersecting lines,  $\overleftrightarrow{MY}$  and  $\overleftrightarrow{AN}$ .



5. Draw a line segment  $\overline{PO}$  intersecting ray  $\overrightarrow{LA}$ .



6. Draw line  $\overleftrightarrow{PU}$ , parallel to ray  $\overrightarrow{RA}$ .

